

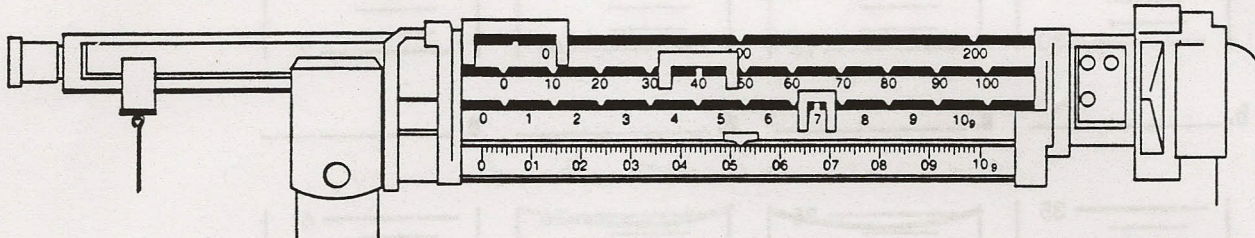
# LABORATORY SKILLS ASSESSMENT

## Using Laboratory Measuring Devices

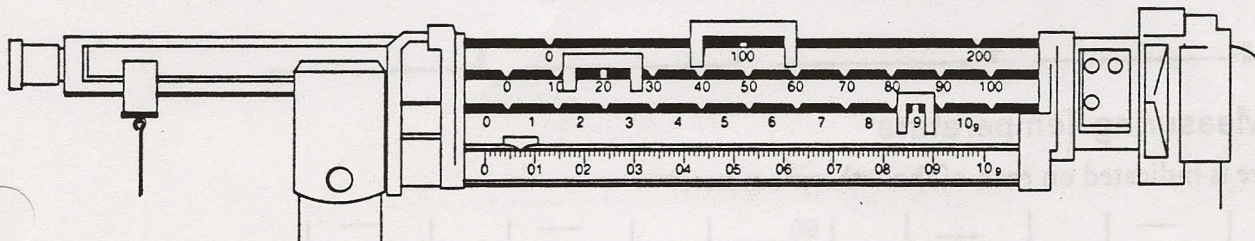
Lab and  
Safety Skills

### Balance: Determining Mass

1. What mass is shown on each of these balances?



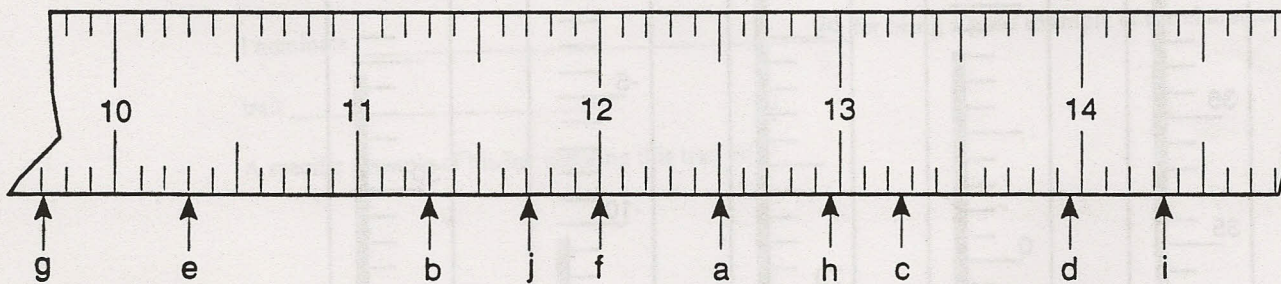
a. The mass of the object would be read as \_\_\_\_\_.



b. The mass of the object would be read as \_\_\_\_\_.

### Metric Ruler: Determining Length

2. What lengths are indicated on this ruler?



a. \_\_\_\_\_

f. \_\_\_\_\_

b. \_\_\_\_\_

g. \_\_\_\_\_

c. \_\_\_\_\_

h. \_\_\_\_\_

d. \_\_\_\_\_

i. \_\_\_\_\_

e. \_\_\_\_\_

j. \_\_\_\_\_