


1. Measure the full length of the following as accurately as you can. Write your answers on the answer sheet.

Name: _____

a. _____


b. _____


c. 

d. 

e. 

f. 

g. 

h. 

i. 

j. 

2. a. 135 mm = _____ cm

b. 307 mm = _____ cm

c. 34.5 cm = _____ mm

d. 6.3 cm = _____ mm

e. 204 m = _____ cm